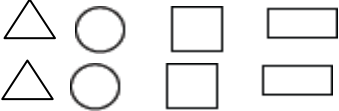
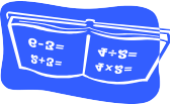
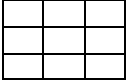
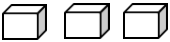




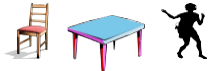




MONDAY	TUESDAY	WEDNESDAY	THURSDAY	FRIDAY								
	<p>Return your completed calendars August 19th to attend a fun party!</p>											
<p>3 School starts on August 14. How many days until school starts? Don't forget to count weekends!</p>	<p>4 Draw the shapes below and color one out of four of each shape.</p> 	<p>5 Measure your height in inches and weigh yourself in pounds. Record the results in notebook.</p>	<p>6 Write the facts for these fact families: 10, 7, 3 9, 2, 11 6, 4, 10</p> 	<p>7 How many squares can you find? Be careful! There are more than 9!!</p> 								
<p>10 Write the number that is 2 more than 10; 2 more than 8; 2 more than 7; 2 more than 11; 2 more than 17.</p>	<p>11 Survey friends and neighbors to find out what kind of pets they have. Graph the results in a pictograph. Make a category for "No Pets".</p>	<p>12 Count out 21 pennies. Put them in 3 equal groups. How many are in each group? Do you still have a total of 21 pennies?</p>	<p>13 Find all the cubes you can in your home. Remember to search your games and toys.</p> 	<p>14 Estimate how many hands wide your kitchen table is. Record your estimate. Now measure with your hand. How close were you?</p>								
<p>17 Make a Time Log.</p> <table border="1" data-bbox="100 1016 474 1175"> <tr> <td>Activity</td> <td></td> </tr> <tr> <td>Start Time</td> <td></td> </tr> <tr> <td>End Time</td> <td></td> </tr> <tr> <td>Total Time</td> <td></td> </tr> </table>	Activity		Start Time		End Time		Total Time		<p>18 List 5 things that come in pairs. If you had 6 pairs of shoes, how many shoes would you have? Draw a silly monster with 6 pairs of eyes. </p>	<p>19 Count the number of pennies, nickels, and dimes in your mom's or dad's pocket. Which coin is there more of?</p>	<p>20 Have someone time you to see how many times you can write your first name in 1 minute.</p> 	<p>21 3 + 4 + 4 names the same number as 7 + 4. Write three more ways to show the number 7 + 4.</p>
Activity												
Start Time												
End Time												
Total Time												
<p>24 Copy a sentence from your favorite book. Graph the different letters that are used. Which letter is used most? Are there any letters left out?</p>	<p>25 Count by fives to 100. Write each number as you say it. (Ask your mom or dad to save some grocery receipts to use later.)</p>	<p>26 Use cheerios, m&amp;m's, beans or buttons to make addition and subtraction number sentences.</p>	<p>27 Write the following in your notebook. Fill in the missing numbers: ____, 31, ____ ____, 20, ____ ____, 49, ____</p>	<p>28 Write the facts for these fact families: 8, 4, 12 9, 3, 12 6, 6, 12</p> 								

MONDAY	TUESDAY	WEDNESDAY	THURSDAY	FRIDAY
<p>1 Finish this pattern: 2, 4, 6, 8, __, __, __, __, __, __, __, __ What kind of numbers are these?</p>	<p>2 Write the following in your notebook. Fill in the missing numbers. __, 30, __, 17, __ __, 19, __, 60, __</p>	<p>3 Draw these items: 2 motorcycles 1 car 1 tricycle How many wheels in all?</p>	<p>4 Happy 4th of July! Count all of the American flags you see today.</p>	<p>5 Estimate the number of footsteps from your couch to the front door. Write down your estimate. Check to see if you are right. Write down the actual number of steps.</p>
<p>8 Use a grocery receipt your mom saved for you. Circle the most expensive item in red. Circle the least expensive item in blue. How many items are more than \$10.00?</p>	<p>9 Color and cut out one red, one blue, and one green circle. The red circle is not first. The green circle is between the red and blue circles. Glue or draw the circles in order in your notebook.</p>	<p>10 Use pennies, nickels, and dimes to make 19¢. Draw a picture to show your coins.</p> 	<p>11 Can you think of animals that weigh more than 100 pounds? List as many as you can.</p>	<p>12 Finish this pattern: 1, 3, 5, 7, , , , __, __, __, __, __, __ What kind of numbers are these?</p>
<p>15 Count on to find each answer. No fingers allowed! 7 + 2 =            5 + 2 = 6 + 3 =            9 + 2 = 2 + 4 =            5 + 3 =</p>	<p>16 Write the number that is 2 fewer than 21; 2 fewer than 41; 2 fewer than 61; 2 fewer than 81.</p>	<p>17 Write the numbers from 1 to 50 in the pattern that they would be in on a hundred chart.</p>	<p>18 Write the numbers from 51 to 100 in the pattern that they would be in on a hundred chart.</p>	<p>19 Write the following in your notebook. Fill in the missing numbers. , 69, __, __ __, 89, __, __ __, 99, __, __</p>
<p>22 Write your address. Does your address have more even or odd numbers? Remember to include your zip code.</p>	<p>23 Count down to find each answer. 13 - 8 =    15 - 6 = 12 - 5 =    14 - 7 = 11 - 2 =    16 - 8 =</p>	<p>24 Count by 10s to 100. Write the numbers as you say them. How many tens does it take to make 100?</p>	<p>25 Measure your height in inches and record. Weigh yourself in pounds and record. Look at your notebook page for June 5th. How much have you grown?</p>	<p>26 Count by 10s from 7 to 107. 7, 17, 27.... Write the numbers as you say them.</p>
<p>29 Write the following in your notebook. Fill in the missing numbers. __, __, 21, __, __ __, __, 71, __, __ __, __, 39, __, __</p>	<p>30 Write the facts for these fact families: 6, 11, 5; 5, 9, 4; and 8, 5, 3. (Ask someone to save an empty egg carton for you.)</p>	<p>31 Brian has 12 cookies. He gives 5 cookies to his friend. How many cookies does Brian have left?</p>		

MONDAY	TUESDAY	WEDNESDAY	THURSDAY	FRIDAY
			<p>1 Get permission to go outside. Look for things shaped like a rectangle. List as many as you can.</p>	<p>2 Estimate the number of footsteps from your bed to the refrigerator. Write down your estimate and the actual number of steps. What is the difference?</p>
<p>5 Number the cups in an egg carton from 1- 12. Put 3 beans in the carton, close it and shake. Open and add the numbers of the cups where the beans fell. Write the total. Do it four times.</p>	<p>6 How many ways can you make 10?  <math>6 + 4 = 9</math>   <math>11 - 1 = 10</math>  <math>8 - 2 + 4 = 10</math>                      Write as many ways as you can think of.</p>	<p>7 There are 3 girls, 2 chairs, and 1 table in a room. Draw a picture to show the total number of legs in the room.</p> 	<p>8 Joe has 15 pencils. His mom bought him 12 more pencils to start school. How many pencils does Joe have now?</p>	<p>9 Jim needed to save 27 cents to buy some stickers. What coins could he save that would total 27 cents?</p>
<p>12 Count how many math activities you did this summer. Write the number in your notebook. What was your favorite activity?</p>	<p>13 Put your first and last name on the front of your notebook. Put 1st Grade on the front of your notebook. Take the notebook to your teacher tomorrow!</p>	<p>14 First day of school!</p> 		
	<p>Great work! You are ready for 1st grade now! Be sure to turn in your calendar by August 19th!</p>			